

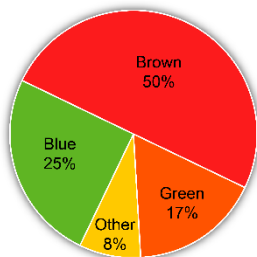
Activity 1 Assessment

Exploring Circle Graphs

Exploring Circle Graphs

Understands that a circle graph represents data that are parts of one whole

Students' Eye Colours



The sum of the percents is 100. This represents all the students who were surveyed.

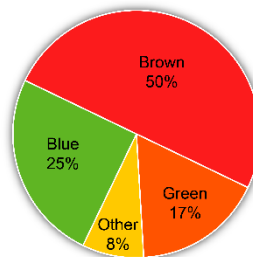
Calculates a percent of a number

Determine 15% of 200.

"I know 1% of 200 is 2.
So, 15% of 200 = $15 \times (1\% \text{ of } 200)$
= 15×2
= 30"

Interprets a circle graph to answer questions

Students' Eye Colours



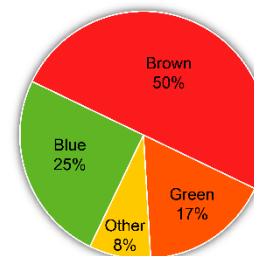
120 students were surveyed.

The number of students with blue eyes is:
25% of 120
= 0.25×120
= 30

30 students have blue eyes.

Uses interpretation of a circle graph to draw conclusions

Students' Eye Colours



"25% of students have blue eyes. The percent of students who have green or "other" eye colours is $8\% + 17\% = 25\%$. So, the same number of students have blue eyes as have green or other."

Observations/Documentation